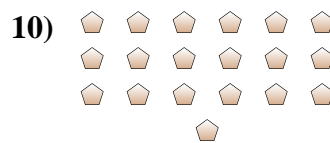
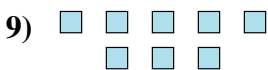
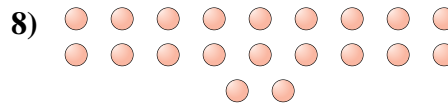
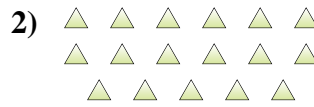
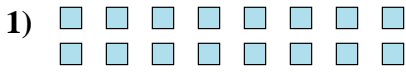




Déterminez si le nombre de figures dans chaque boîte est pair ou impair.

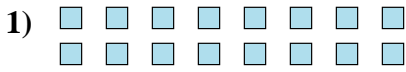
**Réponses**



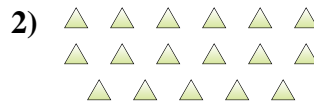
- 1. \_\_\_\_\_
- 2. \_\_\_\_\_
- 3. \_\_\_\_\_
- 4. \_\_\_\_\_
- 5. \_\_\_\_\_
- 6. \_\_\_\_\_
- 7. \_\_\_\_\_
- 8. \_\_\_\_\_
- 9. \_\_\_\_\_
- 10. \_\_\_\_\_



Déterminez si le nombre de figures dans chaque boîte est pair ou impair.



16



17



5



6



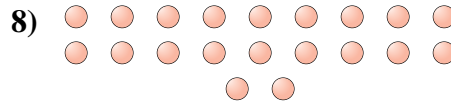
13



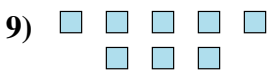
15



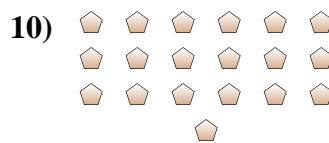
8



20



8



19

**Réponses**

1. pair

2. impair

3. impair

4. pair

5. impair

6. impair

7. pair

8. pair

9. pair

10. impair