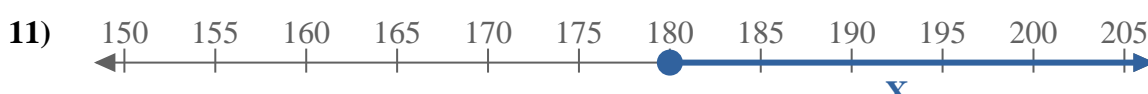
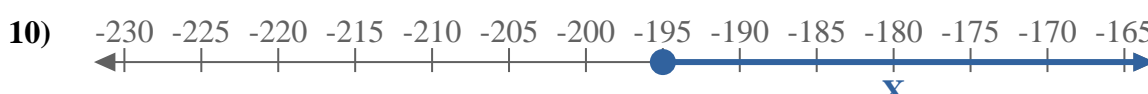
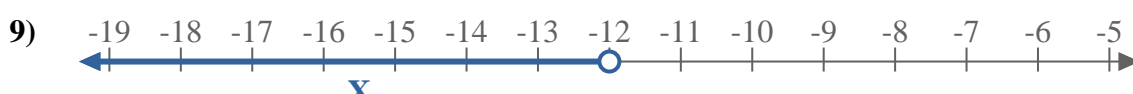
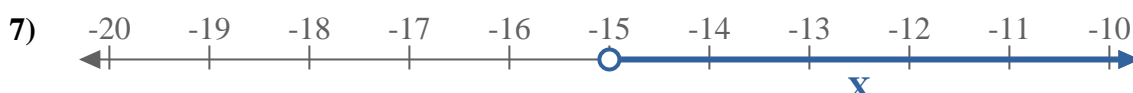
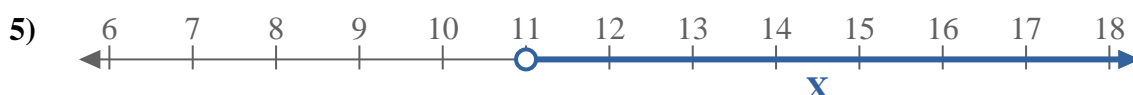
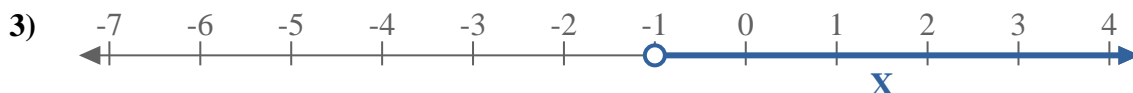
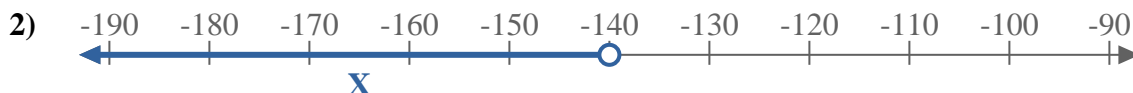
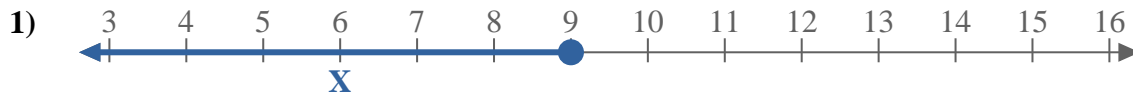
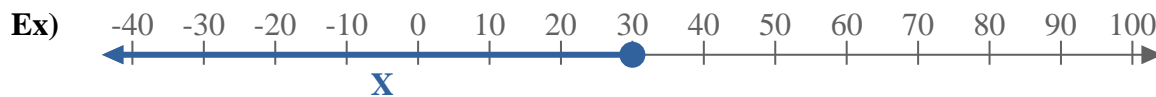




Ecrivez une inégalité à partir d'une droite numérique.



**Réponses**

Ex.  $X \leq 30$

1. \_\_\_\_\_

2. \_\_\_\_\_

3. \_\_\_\_\_

4. \_\_\_\_\_

5. \_\_\_\_\_

6. \_\_\_\_\_

7. \_\_\_\_\_

8. \_\_\_\_\_

9. \_\_\_\_\_

10. \_\_\_\_\_

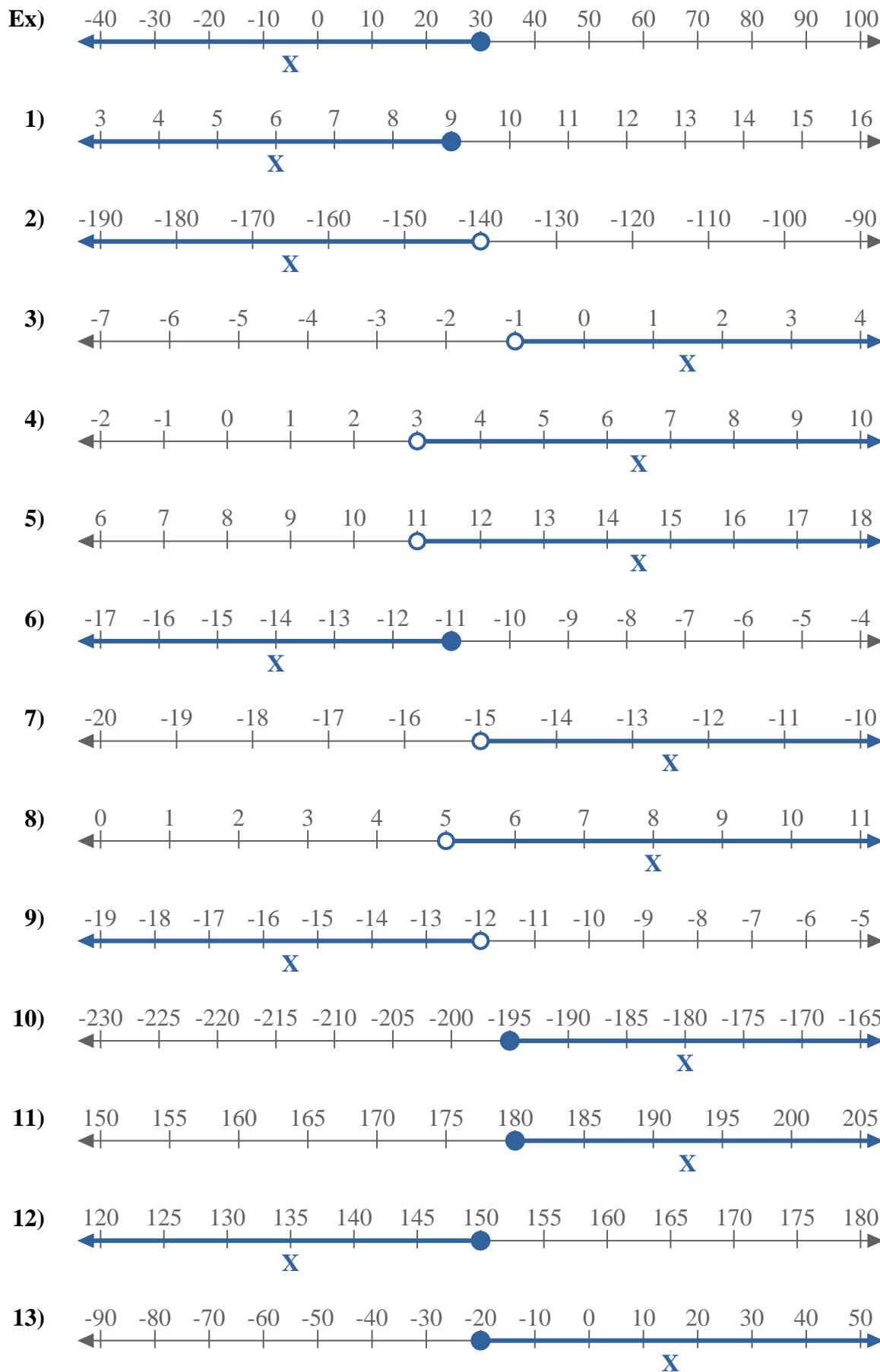
11. \_\_\_\_\_

12. \_\_\_\_\_

13. \_\_\_\_\_



Ecrivez une inégalité à partir d'une droite numérique.

RéponsesEx.  $X \leq 30$ 1.  $X \leq 9$ 2.  $X < -140$ 3.  $X > -1$ 4.  $X > 3$ 5.  $X > 11$ 6.  $X \leq -11$ 7.  $X > -15$ 8.  $X > 5$ 9.  $X < -12$ 10.  $X \geq -195$ 11.  $X \geq 180$ 12.  $X \leq 150$ 13.  $X \geq -20$