





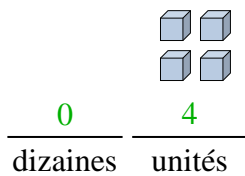




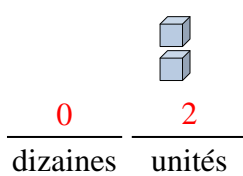
Remplir les blancs pour trouver les montants.

**Réponses**

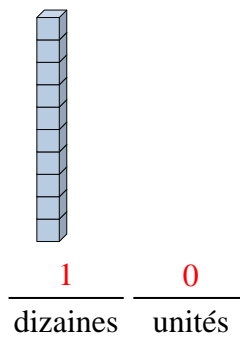
Ex)



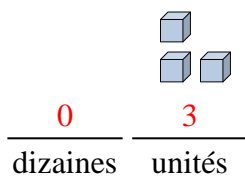
1)



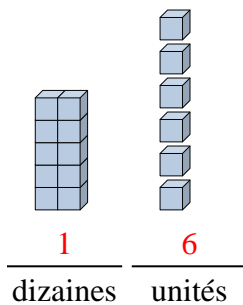
2)



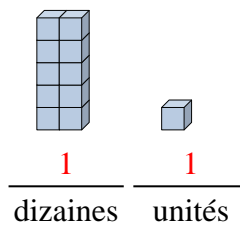
3)



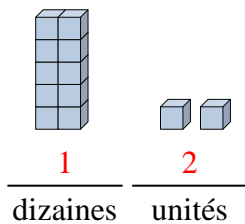
4)



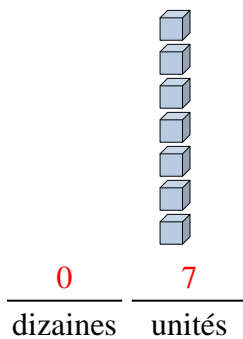
5)



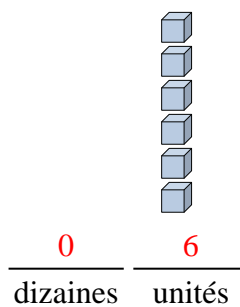
6)



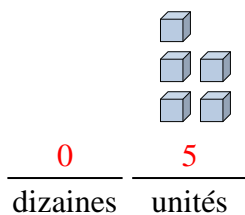
7)



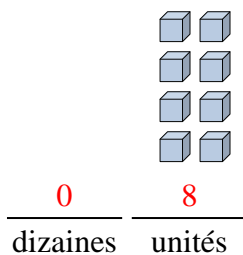
8)



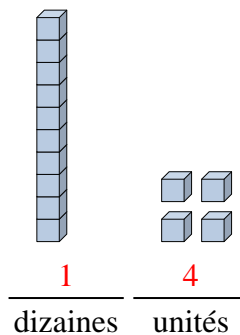
9)



10)



11)

Ex. 41. 22. 103. 34. 165. 116. 127. 78. 69. 510. 811. 14



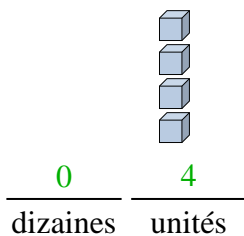




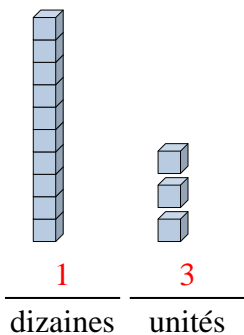


Remplir les blancs pour trouver les montants.

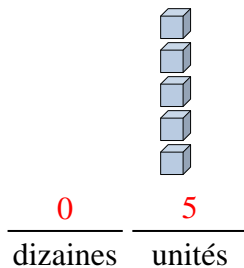
Ex)



1)



2)



**Réponses**

Ex. 4

1. 13

2. 5

3. 16

4. 19

5. 12

6. 2

7. 9

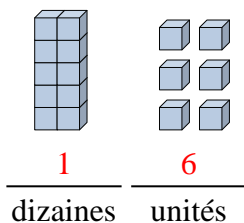
8. 7

9. 10

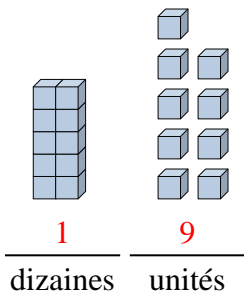
10. 17

11. 8

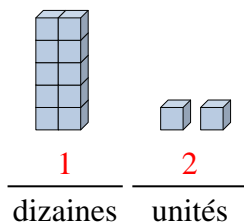
3)



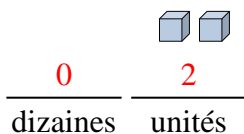
4)



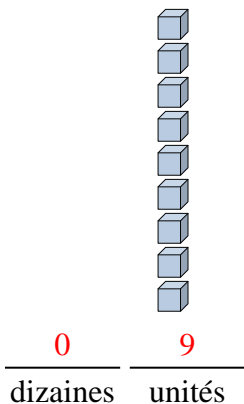
5)



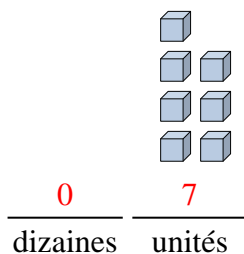
6)



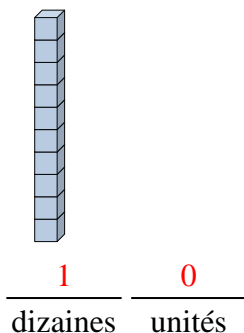
7)



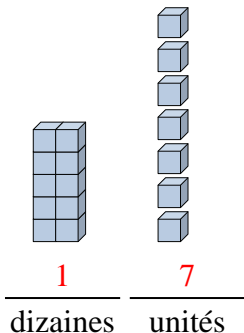
8)



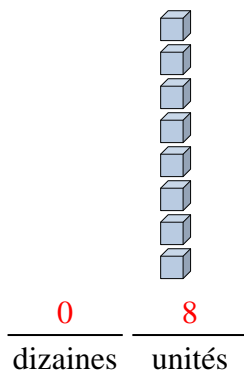
9)



10)



11)



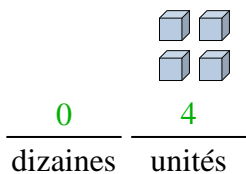




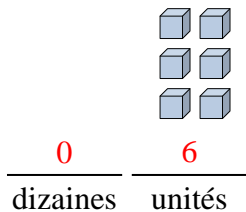


Remplir les blancs pour trouver les montants.

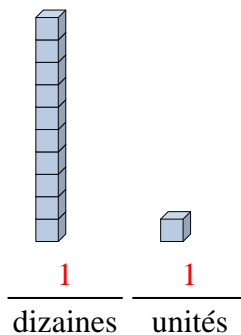
Ex)



1)



2)



**Réponses**

Ex. 4

1. 6

2. 11

3. 14

4. 2

5. 13

6. 16

7. 3

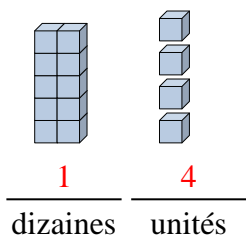
8. 17

9. 12

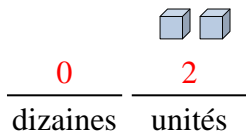
10. 9

11. 8

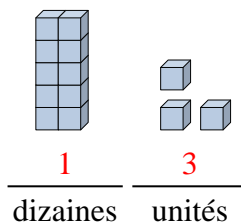
3)



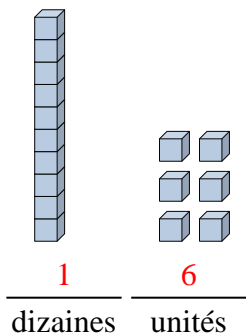
4)



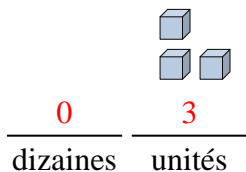
5)



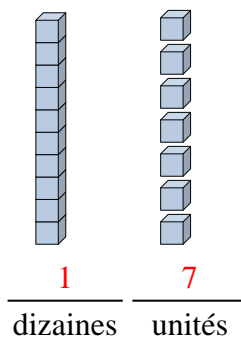
6)



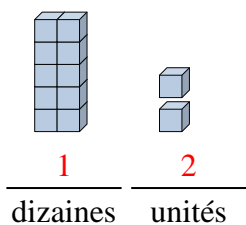
7)



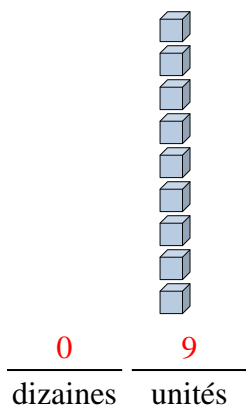
8)



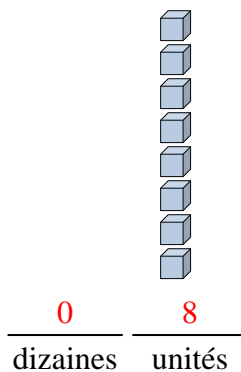
9)



10)



11)





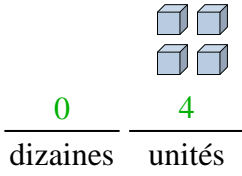




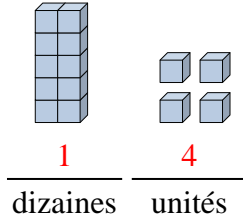


Remplir les blancs pour trouver les montants.

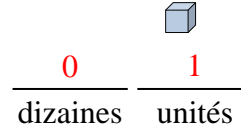
Ex)



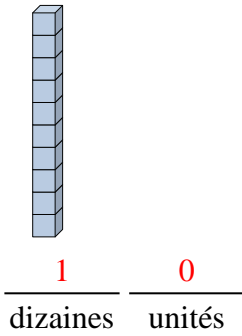
1)



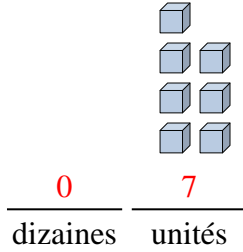
2)

**Réponses**Ex. 41. 142. 13. 104. 75. 96. 87. 28. 69. 1310. 1911. 3

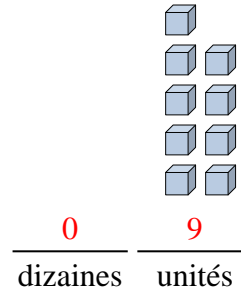
3)



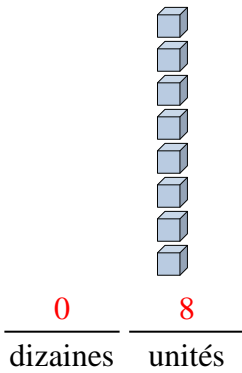
4)



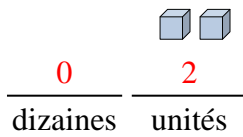
5)



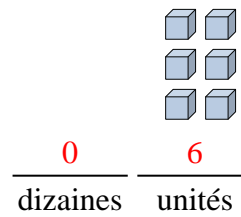
6)



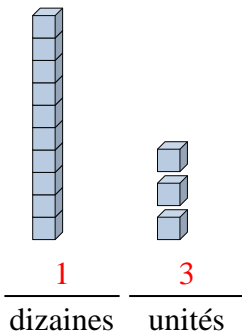
7)



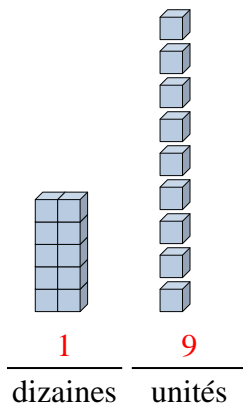
8)



9)



10)



11)

